

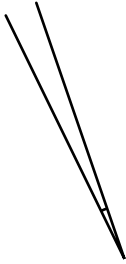
Measuring Angles

Name: _____ Date: _____



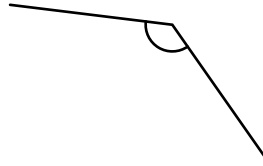
Use your protractor to extend the lines and measure each angle.

(1)



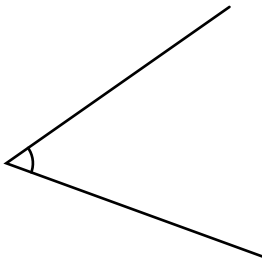
This angle is
7 degrees.

(6)



This angle is
_____ degrees.

(2)



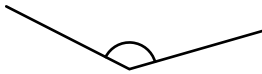
This angle is
_____ degrees.

(7)



This angle is
_____ degrees.

(3)




This angle is
_____ degrees.

(8)



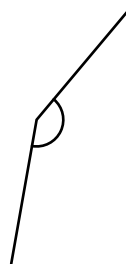
This angle is
_____ degrees.

(4)



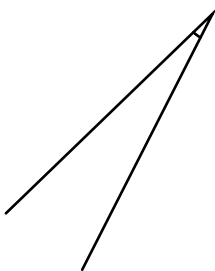
This angle is
_____ degrees.

(9)



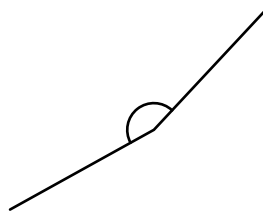
This angle is
_____ degrees.

(5)



This angle is
_____ degrees.

(10)



This angle is
_____ degrees.

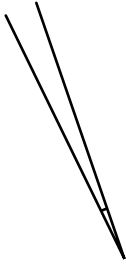
Measuring Angles

ANSWER KEY



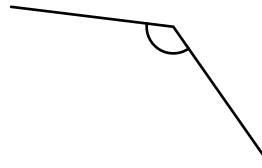
Use your protractor to extend the lines and measure each angle.

(1)



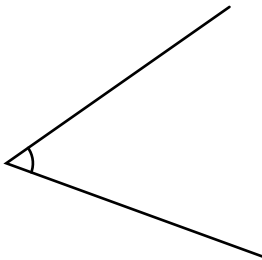
This angle is
7 degrees.

(6)



This angle is
132 degrees.

(2)



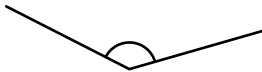
This angle is
55 degrees.

(7)



This angle is
164 degrees.

(3)




This angle is
137 degrees.

(8)




This angle is
151 degrees.

(4)



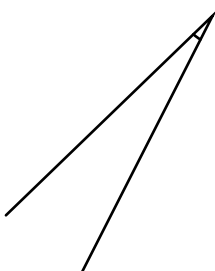
This angle is
123 degrees.

(9)



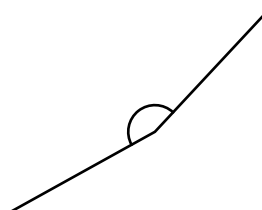
This angle is
150 degrees.

(5)



This angle is
19 degrees.

(10)



This angle is
162 degrees.